

Name:

Klasse:


Datum:

Lösung


Uhrzeit

Trage die Uhrzeiten in beiden Schreibweisen ein.


Wie spät ist es?




4:05 Uhr
16:05 Uhr




6:55 Uhr
18:55 Uhr



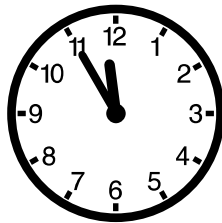
2:25 Uhr
14:25 Uhr




6:05 Uhr
18:05 Uhr



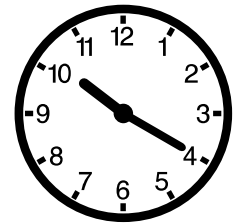
8:20 Uhr
20:20 Uhr




11:55 Uhr
23:55 Uhr




09:40 Uhr
21:40 Uhr




10:20 Uhr
22:20 Uhr




0:20 Uhr
12:20 Uhr




4:35 Uhr
16:35 Uhr




2:40 Uhr
14:40 Uhr




7:55 Uhr
19:55 Uhr




1:50 Uhr
13:50 Uhr



6:20 Uhr
18:20 Uhr



0:35 Uhr
12:35 Uhr



11:25 Uhr
23:25 Uhr