

Name:

Klasse:


Datum:

Lösung


Uhrzeit

Trage die Uhrzeiten in beiden Schreibweisen ein.

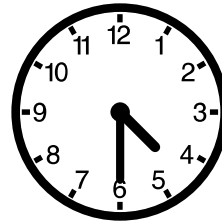
Wie spät
ist es?




0:20 Uhr
12:20 Uhr




6:55 Uhr
18:55 Uhr



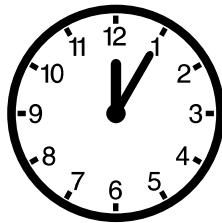
4:30 Uhr
16:30 Uhr




10:15 Uhr
22:15 Uhr




7:45 Uhr
19:45 Uhr




0:05 Uhr
12:05 Uhr




1:40 Uhr
13:40 Uhr




6:35 Uhr
18:35 Uhr




4:35 Uhr
16:35 Uhr




9:05 Uhr
21:05 Uhr




11:30 Uhr
23:30 Uhr




9:15 Uhr
21:15 Uhr




3:20 Uhr
15:20 Uhr



0:45 Uhr
12:45 Uhr



4:55 Uhr
16:55 Uhr



11:40 Uhr
23:40 Uhr