

Name:

Klasse:


Datum:

Lösung


Uhrzeit

Trage die Uhrzeiten in beiden Schreibweisen ein.


Wie spät ist es?



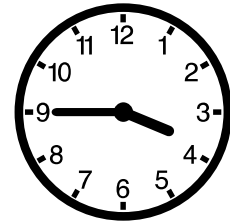
3:15 Uhr
15:15 Uhr




7:45 Uhr
19:45 Uhr




11:15 Uhr
23:15 Uhr




3:45 Uhr
15:45 Uhr




1:45 Uhr
13:45 Uhr




6:15 Uhr
18:15 Uhr




2:45 Uhr
14:45 Uhr




7:15 Uhr
19:15 Uhr




9:45 Uhr
21:45 Uhr




8:15 Uhr
20:15 Uhr




1:15 Uhr
13:15 Uhr




11:45 Uhr
23:45 Uhr




0:15 Uhr
12:15 Uhr



4:45 Uhr
16:45 Uhr



8:45 Uhr
20:45 Uhr



9:15 Uhr
21:15 Uhr